

La soustraction dans le jardin

Choose a subtraction fact card. Use the flower manipulatives to find the difference. Write the subtraction fact and answer on your recording sheet. Put the card back and choose a new fact. Keep going until you have filled out your whole recording sheet.



$20 - 5$



$19 - 7$



$18 - 4$



$17 - 6$



$16 - 6$



$15 - 9$



$14 - 8$



$13 - 4$



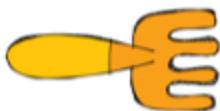
$12 - 0$



$11 - 1$



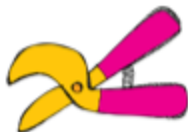
$10 - 9$



$9 - 4$



$8 - 7$



$7 - 3$



$6 - 5$



$5 - 0$



$4 - 2$



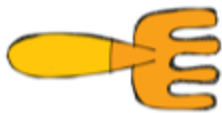
$3 - 1$



$20 - 1$



$19 - 0$



$18 - 5$



$17 - 9$



$16 - 2$



$15 - 4$



$14 - 6$



$13 - 8$



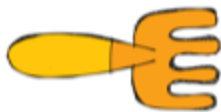
$12 - 3$



$11 - 8$



$10 - 5$



$9 - 2$



$8 - 2$



$7 - 4$



$6 - 6$



$5 - 2$



$4 - 1$



$3 - 3$



Name: _____

la soustraction dans le jardin



$\underline{\quad} - \underline{\quad} = \underline{\quad}$	$\underline{\quad} - \underline{\quad} = \underline{\quad}$	$\underline{\quad} - \underline{\quad} = \underline{\quad}$
$\underline{\quad} - \underline{\quad} = \underline{\quad}$	$\underline{\quad} - \underline{\quad} = \underline{\quad}$	$\underline{\quad} - \underline{\quad} = \underline{\quad}$
$\underline{\quad} - \underline{\quad} = \underline{\quad}$	$\underline{\quad} - \underline{\quad} = \underline{\quad}$	$\underline{\quad} - \underline{\quad} = \underline{\quad}$
$\underline{\quad} - \underline{\quad} = \underline{\quad}$	$\underline{\quad} - \underline{\quad} = \underline{\quad}$	$\underline{\quad} - \underline{\quad} = \underline{\quad}$

