

combien pour les fleurs?

Count the number of cents on each card. A nickel is worth five cents. Count by 5's. Write the total on your recording sheet by the same number/picture.



1.



2.



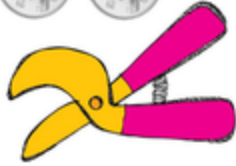
3.



4.




5.



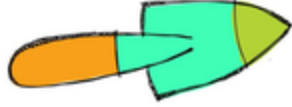
6.



7.



8.



9.



10.



11.



12.



1.





2.



3.



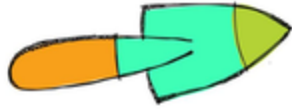
4.



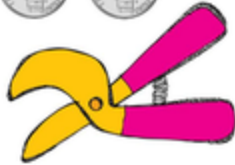
6.



8.



5.




7.



9.



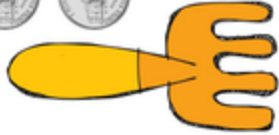
10.



11.



12.



Name: _____

combien pour les fleurs?

1.



2.



3.



4.



5.



6.



7.



8.



9.



10.



11.



12.

