


# Building Blocks Math

## FREEBIE

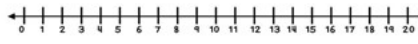
Name: \_\_\_\_\_

### Word Problem Strategies for Missing Addends

 Mason had 6 boxes of building blocks. He got some more for his birthday. Then he had 12 boxes of building blocks altogether. How many boxes of building blocks did Mason get for his birthday?

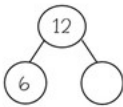
Draw: \_\_\_\_\_

Show on the number line:



Show in the ten frame:


Complete the number bond:



Complete the equations:

$6 + \_\_\_ = 12$

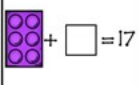
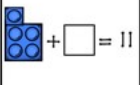
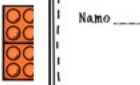
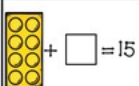
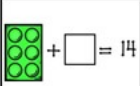
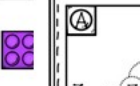
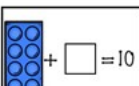
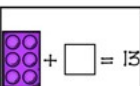




$12 - 6 = \_\_\_$

Answer: Mason got \_\_\_\_\_ boxes of building blocks for his birthday.

Name: \_\_\_\_\_

### Missing Addends Within 20 with Building Blocks

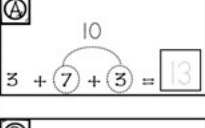
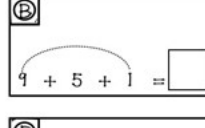
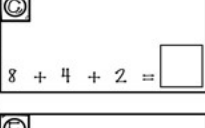
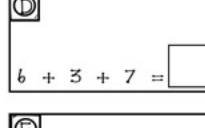
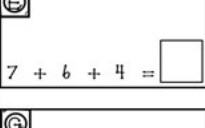
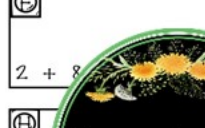
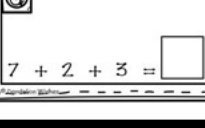

Use your building blocks or mental math to count on to the sum. Write the number for the missing addend in 1.


 + $\square = 17$	 + $\square = 11$	
 + $\square = 15$	 + $\square = 14$	
 + $\square = 10$	 + $\square = 13$	
 + $\square = 16$	 + $\square = 20$	

Name: \_\_\_\_\_

### Make a Ten and Add 3 Numbers

Circle the two addends that equal 10. Add the last addend and write the sum in the box.


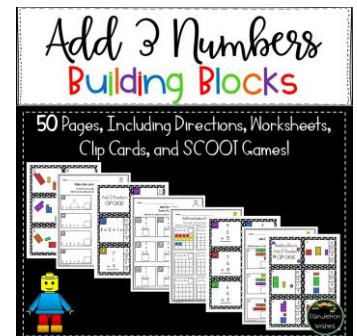
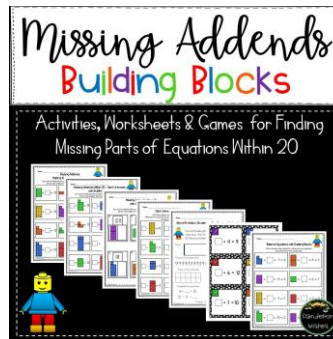
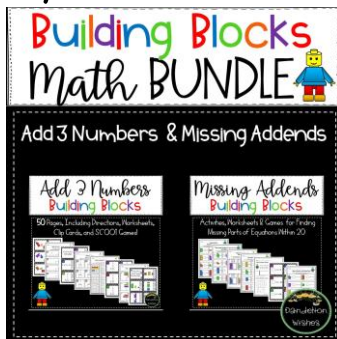
<p>Ⓐ</p>  <p><math>3 + 7 + 3 = 13</math></p>	<p>Ⓑ</p>  <p><math>9 + 5 + 1 = \square</math></p>
<p>Ⓒ</p>  <p><math>8 + 4 + 2 = \square</math></p>	<p>Ⓓ</p>  <p><math>6 + 3 + 7 = \square</math></p>
<p>Ⓔ</p>  <p><math>7 + 6 + 4 = \square</math></p>	<p>Ⓕ</p>  <p><math>2 + 8 = \square</math></p>
<p>Ⓖ</p>  <p><math>7 + 2 + 3 = \square</math></p>	<p>Ⓖ</p>  <p><math>4 + 5 + 6 = \square</math></p>



# Thank you for your purchase!



You may also be interested in:




By following **Dandelion Wishes**, you will be notified of sales, freebies, and new products!! ☆ [Follow Dandelion Wishes](#)

Copyright © Dandelion Wishes 2019. All rights reserved by author. This product is to be used by the original downloader only. Copying for more than one teacher, classroom, department, school, or school system is prohibited. This product may not be distributed or displayed digitally for public view. Failure to comply is a copyright infringement and a violation of the Digital Millennium Copyright Act (DMCA). Clipart and elements found in this PDF are copyrighted and cannot be extracted and used outside of this file without permission or license. Intended for classroom and personal use by the original downloader only. If you wish to tell others about this resource, please send them the resource's link so that they can download it directly from our TPT store. This resource may not be uploaded to any website for download. Linking back to our store is encouraged and appreciated, but uploading this product to a website for others to download is strictly prohibited. This product is not editable due to licensing restrictions on the clip art and fonts used within the file. Please let me know at [dandelionwishes83@gmail.com](mailto:dandelionwishes83@gmail.com) if you have any questions or concerns about this product. I would be happy to make any adjustments necessary. Thank you so much to the following creators of clipart, fonts, papers, and borders!




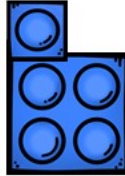
Name \_\_\_\_\_





## Missing Addends Within 20 with Building Blocks


Use your building blocks or mental math to count on to the sum.  
Write the number for the missing addend in the box.



$$6 + \square = 17$$



$$7 + \square = 11$$



$$12 + \square = 18$$



$$6 + \square = 15$$



$$6 + \square = 14$$



$$4 + \square = 12$$



$$8 + \square = 10$$


$$6 + \square = 13$$


$$7 + \square = 13$$



$$7 + \square = 16$$


$$6 + \square = 20$$

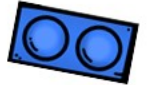


Name \_\_\_\_\_

# Word Problem Strategies for Missing Addends

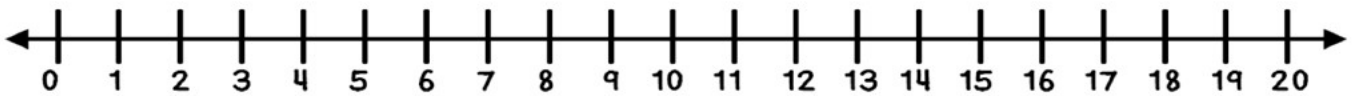


Mason had 6 boxes of building blocks. He got some more for his birthday. Then he had 12 boxes of building blocks altogether. How many boxes of building blocks did Mason get for his birthday?



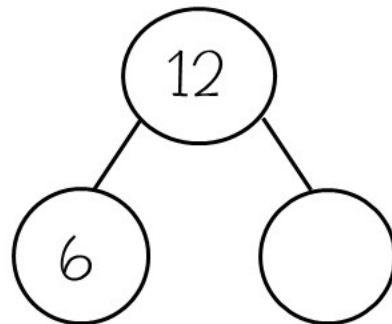
Draw:

Show on the number line:



Show in the ten frame:


Complete the number bond:




Complete the equations:

$$6 + \underline{\quad} = 12$$

$$12 - 6 = \underline{\quad}$$

Answer: Mason got \_\_\_\_\_ boxes of building blocks for his birthday.

Name \_\_\_\_\_



## Make a Ten and Add 3 Numbers

Circle the two addends that equal 10.

Add the last addend and write the sum in the box.

**A**

10

$$3 + 7 + 3 = \boxed{13}$$

**B**

$$9 + 5 + 1 = \boxed{\phantom{00}}$$

**C**

$$8 + 4 + 2 = \boxed{\phantom{00}}$$

**D**

$$6 + 3 + 7 = \boxed{\phantom{00}}$$

**E**

$$7 + 6 + 4 = \boxed{\phantom{00}}$$

**F**

$$2 + 8 + 1 = \boxed{\phantom{00}}$$

**G**

$$7 + 2 + 3 = \boxed{\phantom{00}}$$

**H**

$$4 + 8 + 6 = \boxed{\phantom{00}}$$